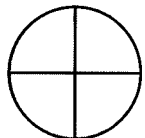


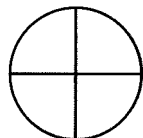
Time: 10 Minutes	Paper Math 3	Total Marks: 10
-------------------------	---------------------	------------------------

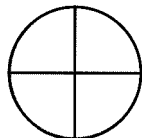
3rd Month, 3rd Week, 5th Day	Syllabus: Unit 3. Exercise # 6. Q # 10,11,12.
------------------------------	--

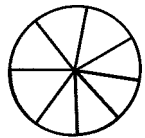
Q.1. Write the fractions of the coloured parts and then solve. (10)

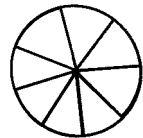
رنگ دار حصوں کے مطابق کسر لکھیں اور پھر حل کریں۔

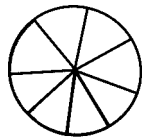












Time: 10 Minutes	Paper Math 3	Total Marks: 10
-------------------------	---------------------	------------------------

3rd Month, 3rd Week, 5th Day	Syllabus: Unit 3. Exercise # 6. Q # 10,11,12.
------------------------------	--

Q.1. Write the fractions of the coloured parts and then solve. (10)

رنگ دار حصوں کے مطابق کسر لکھیں اور پھر حل کریں۔

